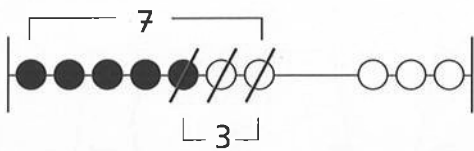
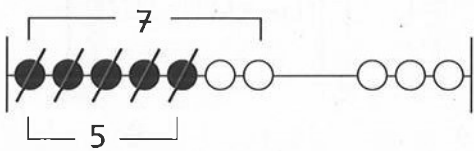


$7 - 3 = ?$



$7 - 3 = 4$

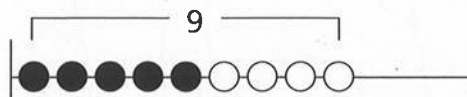
$7 - 5 = ?$



$7 - 5 = 2$


nu jij: streep kralen door

$9 - 6 = ?$



$9 - 6 = \underline{\quad}$

$8 - 5 = ?$



$8 - 5 = \underline{\quad}$

reken uit

$9 - 5 = \underline{\quad}$

$9 - 2 = \underline{\quad}$

$7 - 3 = \underline{\quad}$

$7 - 6 = \underline{\quad}$

$8 - 4 = \underline{\quad}$



reken uit

$7 - 1 = \underline{\quad}$

$7 - 4 = \underline{\quad}$

$3 - 2 = \underline{\quad}$

$8 - 4 = \underline{\quad}$

$8 - 3 = \underline{\quad}$

$5 - 3 = \underline{\quad}$

$6 - 3 = \underline{\quad}$

$5 - 4 = \underline{\quad}$

$6 - 2 = \underline{\quad}$

$5 - 2 = \underline{\quad}$

$9 - 3 = \underline{\quad}$

$9 - 2 = \underline{\quad}$

$6 - 4 = \underline{\quad}$

$4 - 3 = \underline{\quad}$

$8 - 6 = \underline{\quad}$

$10 - 5 = \underline{\quad}$

$10 - 7 = \underline{\quad}$

$9 - 5 = \underline{\quad}$

$9 - 7 = \underline{\quad}$

$6 - 5 = \underline{\quad}$

$4 - 2 = \underline{\quad}$

$7 - 6 = \underline{\quad}$


$10 - 2 = \underline{\quad}$

$10 - 9 = \underline{\quad}$


$9 - 6 = \underline{\quad}$




hoeveel is de ene kist meer dan de andere?



$7 - 4 = 3$



$\underline{\quad} - \underline{\quad} = \underline{\quad}$



$\underline{\quad} - \underline{\quad} = \underline{\quad}$

hoeveel snoepjes blijven er over?



ik eet er 3 op.
over:

$10 - 3 = \underline{\quad}$



ik eet er 6 op.
over:

$\underline{\quad} - \underline{\quad} = \underline{\quad}$



ik eet er 4 op.
over:

$\underline{\quad} - \underline{\quad} = \underline{\quad}$