
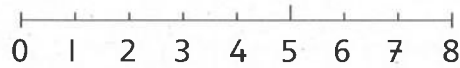


$2 + 2 + 2 = 6$

3 keer 2 is 6

$3 \times 2 = 6$

Nu jij



$_ + _ + _ + _ = _$

$_$ keer 2 is $_$

$_ \times 2 = _$

Reken uit

$2 + 2 = 2 \times 2 = _$

$2 + 2 + 2 + 2 + 2 = _ \times 2 = _$

$2 + 2 + 2 + 2 + 2 + 2 + 2 = _ \times 2 = _$

$2 + 2 + 2 + 2 + 2 + 2 = _ \times 2 = _$



Reken uit

$2 \times 2 = _$

$6 \times 2 = _$

$4 \times 2 = _$

$9 \times 2 = _$

$3 \times 2 = _$

$10 \times 2 = _$

$5 \times 2 = _$


$7 \times 2 = _$

$1 \times 2 = _$

$8 \times 2 = _$

Kleur de vakjes met de uitkomsten van de tafel van 2

1	2	3	4	5	6	7	8	9	10
11	12	13	14	15	16	17	18	19	20



Hoeveel kosten de blikken samen? Schrijf de som eronder



1 blik kost 2 euro




$3 \times \text{€} 2 = \text{€} _$



$_ \times \text{€} 2 = \text{€} _$

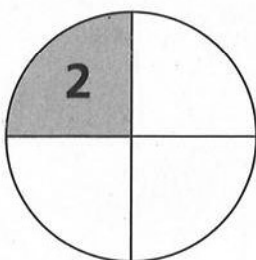


$_ \times \text{€} 2 = \text{€} _$

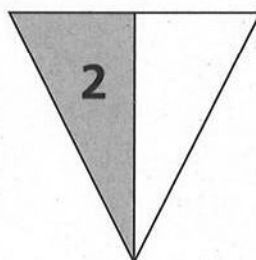


$_ \times \text{€} _ = \text{€} _$

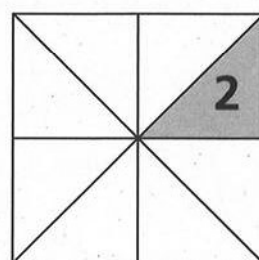
Hoeveel is de hele figuur waard? Schrijf de som eronder



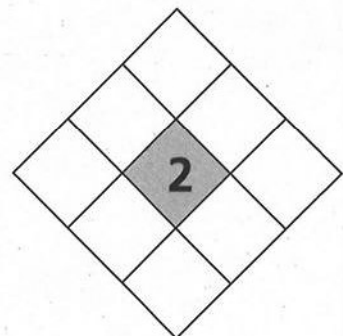
$_ \times 2 = _$



$_ \times 2 = _$



$_ \times 2 = _$



$_ \times 2 = _$