



4	4	4
---	---	---

$4 + 4 + 4 = 12$

3 keer 4 is 12

$3 \times 4 = 12$

Nu jij

4	4	4	4	4	4
---	---	---	---	---	---

$_ + _ + _ + _ + _ = _$

keer 4 is $_ \times 4 = _$



Reken uit

$1 \times 4 = _$

$4 + 4 = 2 \times 4 = _$

$4 + 4 + 4 + 4 = _ \times 4 = _$

$4 + 4 + 4 + 4 + 4 = _ \times 4 = _$

$10 \times 4 = _$



Reken uit

$3 \times 4 = _$

$4 \times 4 = _$

$_ \times 4 = 16$

$_ \times 4 = 40$

$24 = _ \times 4$

$7 \times 4 = _$

$1 \times 4 = _$

$_ \times 4 = 28$

$_ \times 4 = 8$

$36 = _ \times 4$

$2 \times 4 = _$

$9 \times 4 = _$

$_ \times 4 = 4$

$_ \times 4 = 24$

$8 = _ \times 4$

$5 \times 4 = _$

$8 \times 4 = _$

$_ \times 4 = 32$

$_ \times 4 = 36$

$16 = _ \times 4$

$6 \times 4 = _$

$10 \times 4 = _$

$_ \times 4 = 12$

$_ \times 4 = 20$

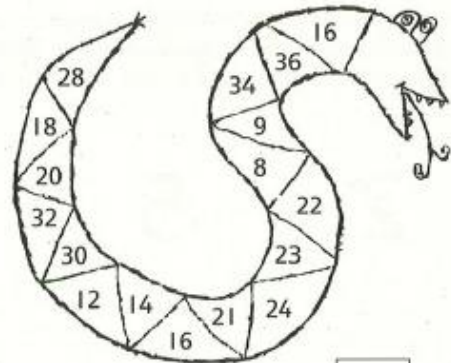
$28 = _ \times 4$



Kleur de vakjes met de uitkomsten van de tafel van 4

1	2	3	4	5	6	7	8	9	10
11	12	13	14	15	16	17	18	19	20
21	22	23	24	25	26	27	28	29	30
31	32	33	34	35	36	37	38	39	40

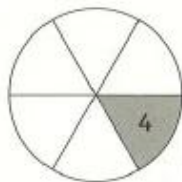
Doe het hier ook



Hoeveel is de hele figuur waard? Schrijf de som eronder



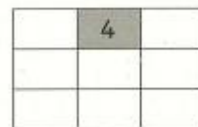
$_ \times 4 = _$




$_ \times 4 = _$



$_ \times 4 = _$



$_ \times 4 = _$



$_ \times 4 = _$