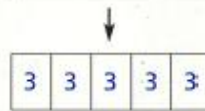

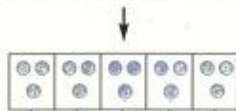




**Verdeel eerlijk**



Sanne verdeelt 15 pruimen in 5 gelijke porties. Hoeveel pruimen krijgt ieder?



$15 : 5 = 3$

**Nu jij**



$25 : 5 = \underline{\quad}$

**Reken uit**

$12 : 2 = \underline{\quad}$

$20 : 5 = \underline{\quad}$

$70 : 10 = \underline{\quad}$

$16 : 2 = \underline{\quad}$

$30 : 5 = \underline{\quad}$



**Vul de tabel in**

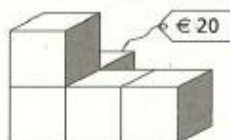
Sanne verdeelt	In .... porties	leder krijgt
16 pruimen	in 2 porties	pruimen
45 pruimen	in 5 porties	pruimen
60 pruimen	in 10 porties	pruimen
30 pruimen	in 5 porties	pruimen
14 pruimen	in 2 porties	pruimen

Sanne verdeelt	In .... porties	leder krijgt
12 pruimen	in 2 porties	pruimen
90 pruimen	in 10 porties	pruimen
40 pruimen	in 5 porties	pruimen
18 pruimen	in 2 porties	pruimen
25 pruimen	in 5 porties	pruimen



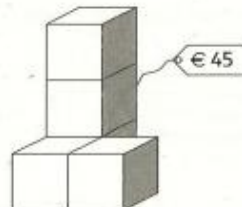
**Hoeveel kost 1 blokje?**

De hele blokkentoren kost:



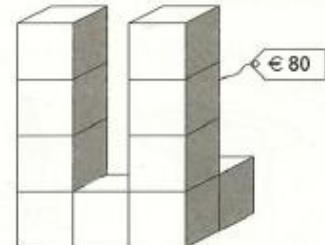
1 blokje kost

$€ 20 : \underline{\quad} = € \underline{\quad}$



1 blokje kost

$€ 45 : \underline{\quad} = € \underline{\quad}$



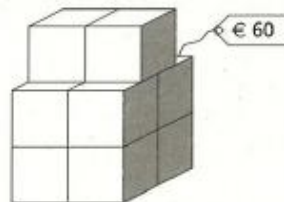
1 blokje kost

$€ 80 : \underline{\quad} = € \underline{\quad}$



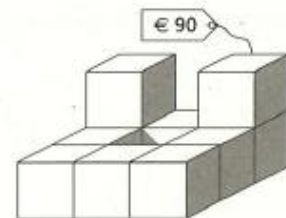
1 blokje kost

$€ 35 : \underline{\quad} = € \underline{\quad}$



1 blokje kost

$€ 60 : \underline{\quad} = € \underline{\quad}$



1 blokje kost

$€ 90 : \underline{\quad} = € \underline{\quad}$