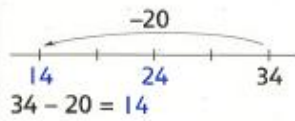


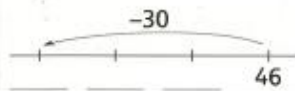


Hoeveel is $34 - 20$?

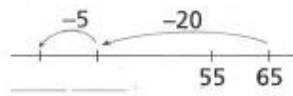


Nu jij

$46 - 30 =$ _____

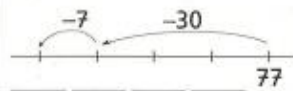


$65 - 25 =$ _____



Nu jij

$77 - 37 =$ _____



Reken uit

$98 - 70 =$ _____

$73 - 50 =$ _____

$81 - 40 =$ _____

$44 - 24 =$ _____

$66 - 36 =$ _____



Reken uit

$60 - 40 =$ _____ $76 - 40 =$ _____ $41 - 20 =$ _____ $38 - 28 =$ _____ $91 - 51 =$ _____

$70 - 30 =$ _____ $54 - 30 =$ _____ $27 - 10 =$ _____ $74 - 34 =$ _____ $56 - 16 =$ _____

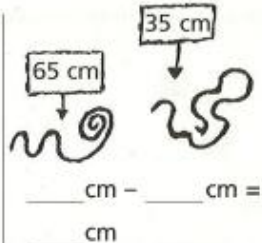
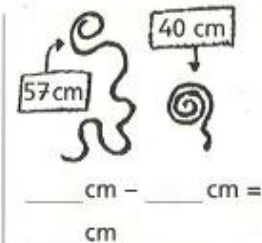
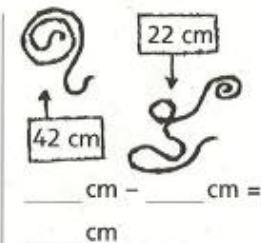
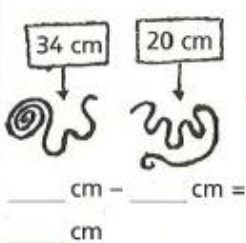
$40 - 20 =$ _____ $33 - 20 =$ _____ $85 - 50 =$ _____ $56 - 16 =$ _____ $42 - 22 =$ _____

$80 - 10 =$ _____ $68 - 60 =$ _____ $49 - 20 =$ _____ $45 - 25 =$ _____ $74 - 54 =$ _____

$50 - 40 =$ _____ $94 - 70 =$ _____ $73 - 40 =$ _____ $62 - 12 =$ _____ $88 - 78 =$ _____



Hoeveel centimeter is de ene dropveter langer dan de andere? Schrijf de som eronder



Hoeveel meter is de ene toren hoger dan de andere? Schrijf de som eronder

