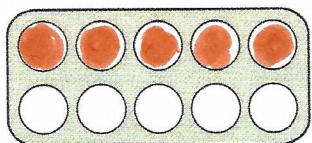
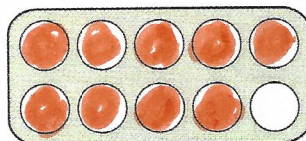
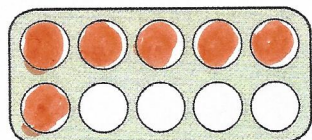


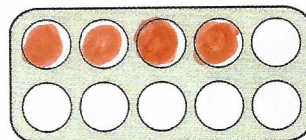
4. Hoeveel eieren om de doos vol te krijgen?

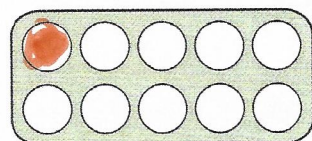
Kleur en vul in.

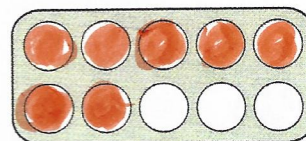


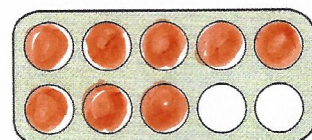


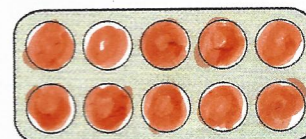


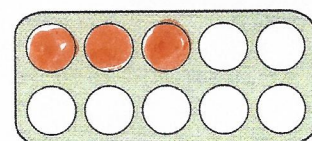


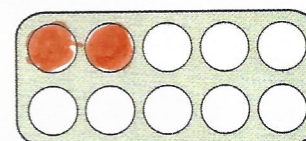






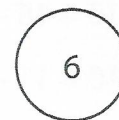
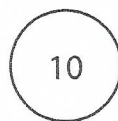
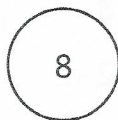

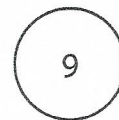
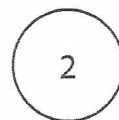
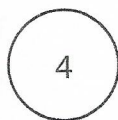
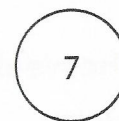
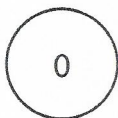
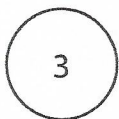






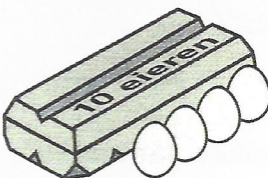
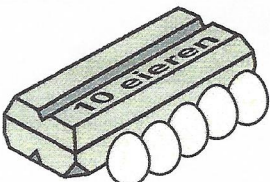

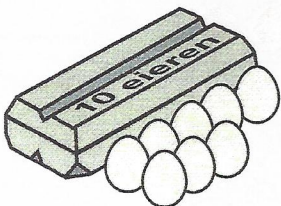
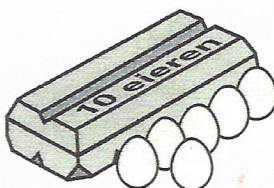

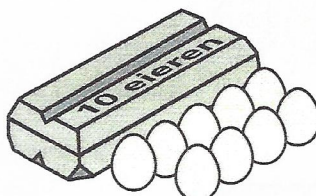

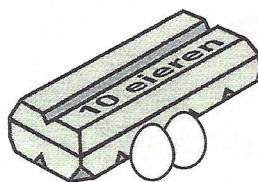

5. Welke getallen maken samen 10?

Geef ze dezelfde kleur.



6. Hoeveel moet eraf tot 10?

Vul in.



7. Hoeveel moet eraf tot 10?

Vul in.

$10 = 14 - \underline{\hspace{2cm}}$

$10 = 17 - \underline{\hspace{2cm}}$

$10 = 13 - \underline{\hspace{2cm}}$

$10 = 20 - \underline{\hspace{2cm}}$

$10 = 15 - \underline{\hspace{2cm}}$

$10 = 10 - \underline{\hspace{2cm}}$

$10 = 16 - \underline{\hspace{2cm}}$

$10 = 18 - \underline{\hspace{2cm}}$

$10 = 11 - \underline{\hspace{2cm}}$

$10 = 12 - \underline{\hspace{2cm}}$