

Schrijf getallen in de vakjes en boven de pijlen

$$\boxed{87} \xrightarrow{-20} \boxed{} \Rightarrow \boxed{17}$$

$$\boxed{36} \xrightarrow{-6} \boxed{} \xrightarrow{-10} \boxed{} \Rightarrow \boxed{10}$$

$$\boxed{93} \xrightarrow{-30} \boxed{} \Rightarrow \boxed{23}$$

$$\boxed{54} \xrightarrow{-4} \boxed{} \xrightarrow{-20} \boxed{} \Rightarrow \boxed{10}$$

$$\boxed{64} \xrightarrow{-40} \boxed{} \Rightarrow \boxed{4}$$

$$\boxed{99} \xrightarrow{-9} \boxed{} \xrightarrow{-10} \boxed{} \Rightarrow \boxed{10}$$

$$\boxed{66} \xrightarrow{-10} \boxed{} \Rightarrow \boxed{36}$$

$$\boxed{75} \xrightarrow{-15} \boxed{} \xrightarrow{-30} \boxed{} \Rightarrow \boxed{10}$$

Reken uit

$47 - \underline{\quad} = 40$

$75 - \underline{\quad} = 50$

$51 - \underline{\quad} = 20$

$44 - \underline{\quad} = 10$

$53 - \underline{\quad} = 50$

$46 - \underline{\quad} = 20$

$63 - \underline{\quad} = 10$

$92 - \underline{\quad} = 30$

$88 - \underline{\quad} = 80$

$69 - \underline{\quad} = 40$

$47 - \underline{\quad} = 20$

$59 - \underline{\quad} = 20$

$34 - \underline{\quad} = 30$

$53 - \underline{\quad} = 30$

$32 - \underline{\quad} = 10$

$66 - \underline{\quad} = 40$

$76 - \underline{\quad} = 70$

$87 - \underline{\quad} = 60$

$88 - \underline{\quad} = 40$

$73 - \underline{\quad} = 20$

Reken uit

$78 - 48 = \underline{\quad}$

$32 - 12 = \underline{\quad}$

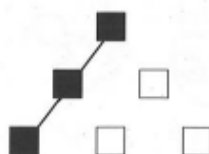
$95 - 25 = \underline{\quad}$

$47 - \underline{\quad} = 10$

$64 - \underline{\quad} = 20$

Een rekenpuzzel

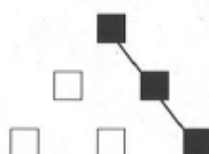
Schrijf de getallen 1, 2, 3, 4, 5 en 6 in de vakjes.
De getallen in drie vakjes op 1 rij zijn samen 10.



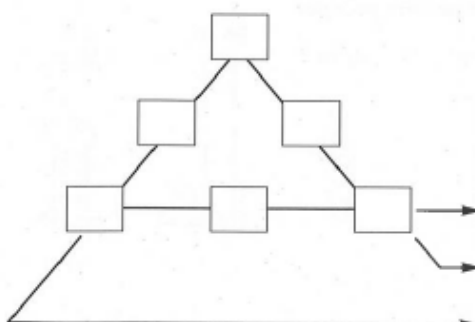
samen 10



samen 10



samen 10



$\underline{\quad} + \underline{\quad} + \underline{\quad} = 10$

$\underline{\quad} + \underline{\quad} + \underline{\quad} = 10$

$\underline{\quad} + \underline{\quad} + \underline{\quad} = 10$

