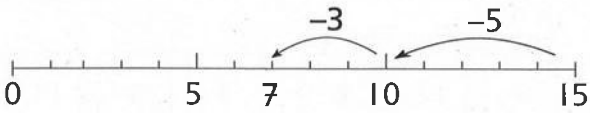




$15 - 8 =$



- Eerst terug tot 10: $15 - 5 = 10$
- Hoeveel moet er nu nog af? $8 - 5 = 3$
- Trek af: $10 - 3 = 7$
- $15 - 8 = 15 - 5 - 3 = 7$
 $\quad \quad \quad \downarrow \quad \downarrow$
 $\quad \quad \quad 10 \quad 3$

Nu jij

- $11 - 4 =$
- $11 - \underline{\quad} = 10$
- $4 - \underline{\quad} = \underline{\quad}$
- $10 - \underline{\quad} = \underline{\quad}$
- $11 - 4 = 11 - \underline{\quad} - \underline{\quad} = \underline{\quad}$
 $\quad \quad \quad \downarrow \quad \downarrow$
 $\quad \quad \quad 10 \quad \underline{\quad}$

Reken uit

- $12 - 4 = 12 - 2 - \underline{\quad} = \underline{\quad}$
 $\quad \quad \quad \downarrow \quad \downarrow$
 $\quad \quad \quad 10 \quad \underline{\quad}$
- $16 - 8 = 16 - \underline{\quad} - \underline{\quad} = \underline{\quad}$
 $\quad \quad \quad \downarrow \quad \downarrow$
 $\quad \quad \quad 10 \quad \underline{\quad}$
- $11 - 3 = 11 - \underline{\quad} - \underline{\quad} = \underline{\quad}$
 $\quad \quad \quad \downarrow \quad \downarrow$
 $\quad \quad \quad 10 \quad \underline{\quad}$
- $14 - 6 = 14 - \underline{\quad} - \underline{\quad} = \underline{\quad}$
 $\quad \quad \quad \downarrow \quad \downarrow$
 $\quad \quad \quad 10 \quad \underline{\quad}$
- $13 - 5 = 13 - \underline{\quad} - \underline{\quad} = \underline{\quad}$
 $\quad \quad \quad \downarrow \quad \downarrow$
 $\quad \quad \quad 10 \quad \underline{\quad}$

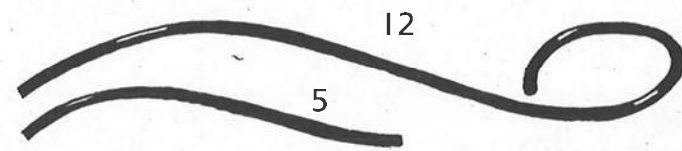


Reken uit

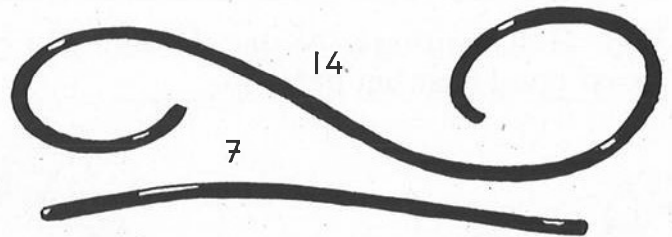
- | | | | |
|--|------------------------------|-------------------------------|------------------------------|
| $13 - 4 = 13 - \underline{\quad} - \underline{\quad} = \underline{\quad}$
$\quad \quad \quad \downarrow \quad \downarrow$
$\quad \quad \quad 10 \quad \underline{\quad}$ | $14 - 9 = \underline{\quad}$ | $19 - 10 = \underline{\quad}$ | $13 - 6 = \underline{\quad}$ |
| $15 - 6 = 15 - \underline{\quad} - \underline{\quad} = \underline{\quad}$
$\quad \quad \quad \downarrow \quad \downarrow$
$\quad \quad \quad 10 \quad \underline{\quad}$ | $15 - 7 = \underline{\quad}$ | $18 - 9 = \underline{\quad}$ | $15 - 7 = \underline{\quad}$ |
| $17 - 8 = 17 - \underline{\quad} - \underline{\quad} = \underline{\quad}$
$\quad \quad \quad \downarrow \quad \downarrow$
$\quad \quad \quad 10 \quad \underline{\quad}$ | $17 - 9 = \underline{\quad}$ | $16 - 7 = \underline{\quad}$ | $16 - 9 = \underline{\quad}$ |
| $14 - 5 = 14 - \underline{\quad} - \underline{\quad} = \underline{\quad}$
$\quad \quad \quad \downarrow \quad \downarrow$
$\quad \quad \quad 10 \quad \underline{\quad}$ | $16 - 8 = \underline{\quad}$ | $17 - 7 = \underline{\quad}$ | $11 - 7 = \underline{\quad}$ |
| $12 - 3 = 12 - \underline{\quad} - \underline{\quad} = \underline{\quad}$
$\quad \quad \quad \downarrow \quad \downarrow$
$\quad \quad \quad 10 \quad \underline{\quad}$ | $14 - 6 = \underline{\quad}$ | $15 - 8 = \underline{\quad}$ | $12 - 8 = \underline{\quad}$ |




Hoeveel is de ene dropveter langer dan de andere? Schrijf de som eronder




$12 - 5 = \underline{\quad}$



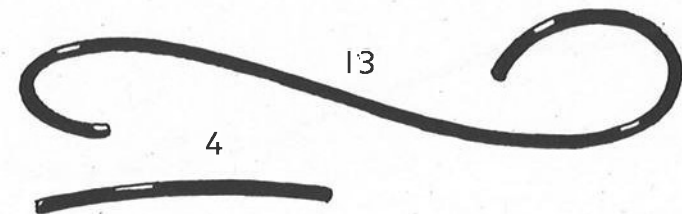
$\underline{\quad} - \underline{\quad} = \underline{\quad}$




$\underline{\quad} - \underline{\quad} = \underline{\quad}$



$\underline{\quad} - \underline{\quad} = \underline{\quad}$



$\underline{\quad} - \underline{\quad} = \underline{\quad}$



$\underline{\quad} - \underline{\quad} = \underline{\quad}$