

4. Hoeveel stippen tel je?

Kleur.

<table border="1"><tr><td>3</td><td>5</td></tr><tr><td>4</td></tr></table>	3	5	4	<table border="1"><tr><td>4</td><td>6</td></tr><tr><td>5</td></tr></table>	4	6	5	<table border="1"><tr><td>3</td><td>1</td></tr><tr><td>2</td></tr></table>	3	1	2	<table border="1"><tr><td>7</td><td>4</td></tr><tr><td>5</td></tr></table>	7	4	5	<table border="1"><tr><td>3</td><td>8</td></tr><tr><td>6</td></tr></table>	3	8	6	<table border="1"><tr><td>5</td><td>2</td></tr><tr><td>3</td></tr></table>	5	2	3
3	5																						
4																							
4	6																						
5																							
3	1																						
2																							
7	4																						
5																							
3	8																						
6																							
5	2																						
3																							

5. Hoeveel stippen op de dobbelsteen?

Teken.

2 stippen	4 stippen	5 stippen	3 stippen	1 stip	6 stippen

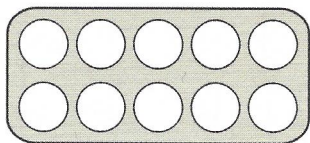
6. Hoeveel eieren tel je?

Maak vast..

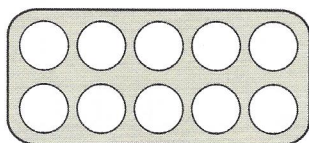
<table border="1"><tr><td>2</td></tr></table>	2	<table border="1"><tr><td>3</td></tr></table>	3	<table border="1"><tr><td>6</td></tr></table>	6	<table border="1"><tr><td>7</td></tr></table>	7
2							
3							
6							
7							

7. Hoeveel eieren in de eierdoos?

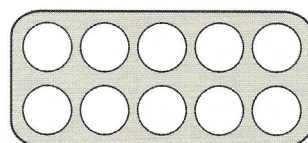
Kleur.



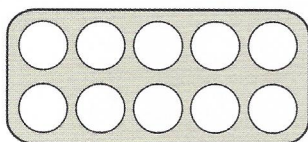
4 eieren



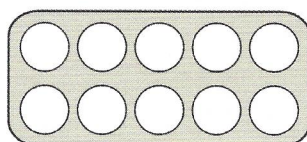
8 eieren



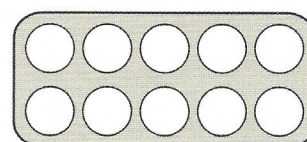
9 eieren



0 eieren



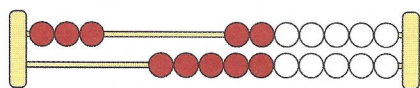
1 ei

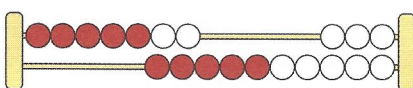


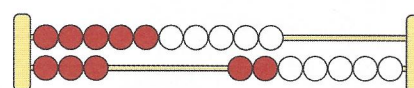
10 eieren

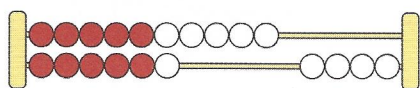
8. Hoeveel kralen tel je?

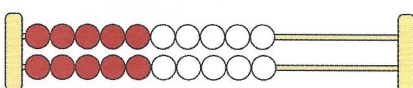
Vul in.

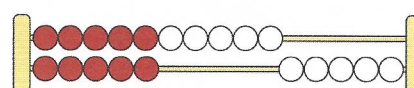














9. Hoeveel kralen op het telraam?


Teken.




4



17



8



12