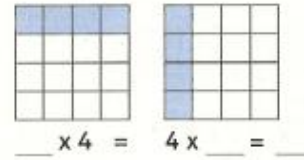
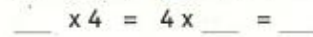
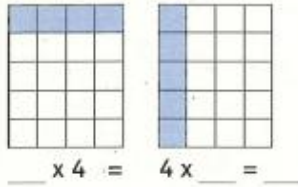
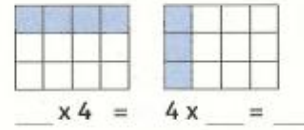

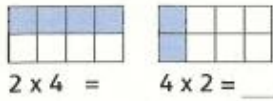
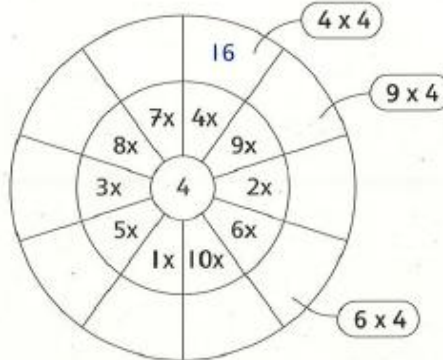


Keer de tafelsommen om



Vul de uitkomsten van de tafel van 4 in het wiel in



Reken uit

$3 \times 4 =$ _____

$9 \times 4 =$ _____

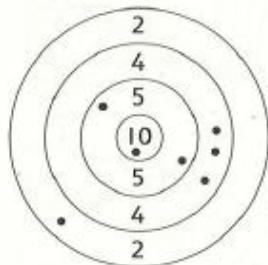
$6 \times 4 =$ _____

$2 \times 4 =$ _____

$7 \times 4 =$ _____

Pijltjes gooien

De kinderen gooien pijltjes. Hoeveel punten hebben ze gegoooid?



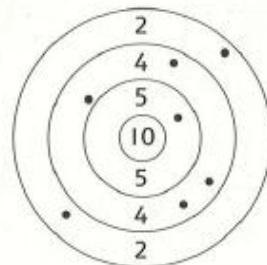
_____ $\times 2 =$ _____

_____ $\times 4 =$ _____

_____ $\times 5 =$ _____

_____ $\times 10 =$ _____

samen _____ punten



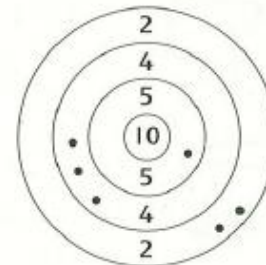
_____ $\times 2 =$ _____

_____ $\times 4 =$ _____

_____ $\times 5 =$ _____

_____ $\times 10 =$ _____

samen _____ punten



_____ $\times 2 =$ _____

_____ $\times 4 =$ _____

_____ $\times 5 =$ _____

_____ $\times 10 =$ _____

samen _____ punten