












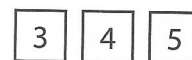



1. Maak samen 10.

Vul in.




2. Welke 2 getallen horen erbij?

Kleur.




3. Welke 2 getallen horen erbij?


Maak vast.




2 4 1 5



5 2 3 3



6 6 2 4



3 2 6 3

4. Welke sommen horen erbij?

Omcirkel.

5 8-3 3+2 4-1

6 4-2 2+4 5+1

7 10-3 4-3 3+4

8 4+4 7+1 7-1

9 8-1 6+3 8+1

12 6+6 5+5 15-3

13 16+4 10+3 12+1

14 12+3 11+3 16-2

15 18-3 17-3 11+4

16 20-4 12+4 18-3