



Hoeveel is $42 - 12$?

_____ 10
 _____ 10
 _____ 10



$42 - 12 = 30$



Nu jij

Kleur de staafjes en blokjes die er afgaan.

_____ 10
 _____ 10
 _____ 10
 | | | | | | | | | |

$37 - 17 =$ _____

Reken uit

$12 - 2 =$ _____

$18 - 8 =$ _____

$38 - 18 =$ _____

$63 - 23 =$ _____

$46 - 16 =$ _____



Reken uit

$28 - 8 =$ _____ $37 - 17 =$ _____ $31 - 21 =$ _____ $32 - 22 =$ _____ $86 - 46 =$ _____

$27 - 7 =$ _____ $25 - 15 =$ _____ $53 - 23 =$ _____ $47 - 37 =$ _____ $91 - 81 =$ _____


$36 - 6 =$ _____ $43 - 13 =$ _____ $77 - 37 =$ _____ $73 - 73 =$ _____ $44 - 14 =$ _____

$54 - 4 =$ _____ $61 - 11 =$ _____ $58 - 48 =$ _____ $55 - 35 =$ _____ $75 - 15 =$ _____

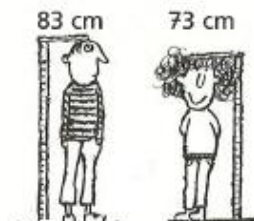
$22 - 2 =$ _____ $56 - 16 =$ _____ $99 - 29 =$ _____ $84 - 64 =$ _____ $63 - 43 =$ _____




Hoeveel centimeter is het ene kind langer dan het andere? Schrijf de som erbij




_____ cm - _____ cm =
 _____ cm langer



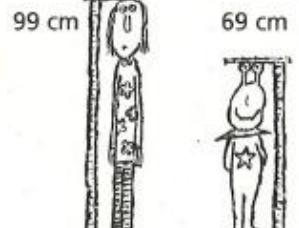
_____ cm - _____ cm =
 _____ cm langer




_____ cm - _____ cm =
 _____ cm langer



_____ cm - _____ cm =
 _____ cm langer



_____ cm - _____ cm =
 _____ cm langer



_____ cm - _____ cm =
 _____ cm langer