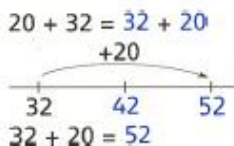
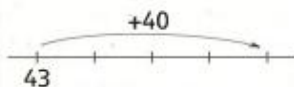


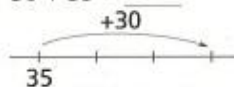
Nu jij

$43 + 40 = \underline{\quad}$



Nu jij

$30 + 35 = \underline{\quad}$



$62 + 10 = \underline{\quad}$

$73 + 20 = \underline{\quad}$

$28 + 70 = \underline{\quad}$

$80 + 19 = \underline{\quad}$

$20 + 56 = \underline{\quad}$



Reken uit

$60 + 40 = \underline{\quad}$ $58 + 40 = \underline{\quad}$ $30 + 21 = \underline{\quad}$ $40 + 23 = \underline{\quad}$ $18 + 70 = \underline{\quad}$

$70 + 20 = \underline{\quad}$ $63 + 30 = \underline{\quad}$ $40 + 33 = \underline{\quad}$ $27 + 20 = \underline{\quad}$ $40 + 12 = \underline{\quad}$

$40 + 30 = \underline{\quad}$ $14 + 50 = \underline{\quad}$ $70 + 18 = \underline{\quad}$ $60 + 19 = \underline{\quad}$ $60 + 27 = \underline{\quad}$

$50 + 50 = \underline{\quad}$ $73 + 20 = \underline{\quad}$ $50 + 34 = \underline{\quad}$ $14 + 60 = \underline{\quad}$ $33 + 40 = \underline{\quad}$

$20 + 30 = \underline{\quad}$ $86 + 10 = \underline{\quad}$ $20 + 67 = \underline{\quad}$ $20 + 21 = \underline{\quad}$ $50 + 38 = \underline{\quad}$



Wat is de stand van de kilometerteller?

Peter heeft een teller op zijn fiets.



De teller staat op

0 3 0

0 2 8

0 5 0

0 4 5

Peter fietst

14 km

10 km

21 km

12 km

Dan staat de teller op

0 4 4

0

0

0

De teller staat op

0 5 7

0 1 0

0 2 7

0 6 9

Peter fietst

30 km

29 km

20 km

11 km

Dan staat de teller op

0

0

0

0